

# DOWNLOAD PDF DOCUMENT



## PRENTICE HALL CHEMISTRY...

**DOWNLOAD DOCUMENT NOW**

**Updated:** 11/06/2017

---

### DISCLAIMER:

CHAUVIN.CO uses the following prentice hall chemistry chapter 5 test book available for free PDF download which is also related with

### PRENTICE HALL CHEMISTRY CHAPTER 5 TEST

There are cases when you need prentice hall chemistry chapter 5 test instantly and have no site to download it from. We can provide you for an opportunity to get as many eBooks as you need and all for free. We offer an access to a rich collection of files in PDF format that are easy to download. You don't need to pay either for prentice hall chemistry chapter 5 test or other books. This is a unique opportunity. We ask you to pass a registration by following the link and answering simple questions. Then you will get an access to prentice hall chemistry chapter 5 test and can download this file and other data without paying for it. We ask you to pass the registration because of endless hackers' attacks that deface our website. When you register, you get a unique access to prentice hall chemistry chapter 5 test and other files, so that bots cannot do harm. So, if you need prentice hall chemistry chapter 5 test right now, you will get it after simple registration.

---

**DOWNLOAD NOW**

# DOWNLOAD PDF DOCUMENT

# DOWNLOAD PDF DOCUMENT

## PRENTICE HALL CHEMISTRY...

### [EXAMVIEW - CHAPTER 14 TEST REVIEW- WILLIAMS.TST](#)

Name: Period: Date: K. Williams ID: A8th Grade Chapter 14 TEST REVIEW 1. Determine the volume of the cylinder. Use 3.14 for  $\pi$ . 2. Complete the table to identify the effect tripling the radius of a cylinder's base has on its volume. Cylinder radius Cylinder Area of Cylinder Height Cylinder Volume (cm<sup>3</sup>) r Base (cm) A  $\pi r^2$  (cm<sup>2</sup>) h (cm) V  $\pi r^2 h$  1 1 3 1 9 1 3. Identify the radius, diameter, and height ...

**File name:** ExamView - Chapter 14 Test Review- Williams.pdf  
[Download now or Read Online](#)

### [MICROSOFT WORD - CHAPTER 2 TEST REVIEW ANSWERS.DOCX](#)

Honors Geometry Chapter 2 Test Review Question Answers 1. Given: BA  $\angle A$  (51 - x) + (y + 9) = 180 Find: m $\angle$  MAT  $\angle y = 120 + x$  (y + 9) + (x + y) = 90 B  $\angle x + 2y = 81$  x + 2(120 + x) = 81  $\angle x + 240 + 2x = 81$   $\angle 3x = -159$  M 51-x y+9 N A x+y  $\angle x = -53$  T  $\angle y = 120 + (-53) = 67$   $\angle$  MAT = 180 - (x + y) = 180 - 14 = 166 2. A certain angle is 39 less than 2 times its complement. Find its supplement. x = 2(90 - ...

**File name:** Chapter 2 Test Review Answers.pdf  
[Download now or Read Online](#)

### [MICROSOFT WORD - CHAPTER 11 TEST REVIEW QUESTION ANSWERS.DOCX](#)

Honors Geometry Chapter 11 Test Review Question Answers 1. Find the area of an equilateral triangle that has sides that measure 8 7 . s 2 3 A Equ. = 4 (8 7 ) 2 3 448 3 = = = (112 3 ) u 2 4 4 2. A rotor of a Wankel automotive engine has the geometric shape shown. The center of each arc is the opposite vertex of the equilateral triangle. a. Find the figure s area a. A = A + 3(A Segment) b. Find the figur...

**File name:** Chapter 11 Test Review Question Answers.pdf  
[Download now or Read Online](#)

### [IB CHAPTER 8 TEST FORM 2A DO NOT WRITE ON TEST](#)

For any credit show all work on a separate sheet of paper for all problems. 13.14. IB Chapter 8 Test Free Response Name: Date; Per: Answer each question on a separate sheet of paper. For each problem do the following: a. Copy or draw a figure. Mark the figure up with the given information. b. Show all calculations. c. Make sure your final answer has the correct units. 1.2.3.4.5. 6. ???? Bonus: a. b. ...

**File name:** Chapter 8 Test Form 2A including Free Response IB.pdf  
[Download now or Read Online](#)





















# DOWNLOAD PDF DOCUMENT

# DOWNLOAD PDF DOCUMENT

Here below another book similar with:

## PRENTICE HALL CHEMISTRY...

---

-  [prentice hall chemistry chapter 5 test](#)
-  [prentice hall chemistry chapter 3 practice problems](#)
-  [prentice hall chemistry standardized test answers](#)
-  [prentice hall chemistry stoichiometry](#)
-  [prentice hall carbon chemistry](#)
-  [prentice hall chapter 12 stoichiometry answers](#)
-  [pearson prentice hall biology workbook answers for chapter 14](#)
-  [prentice hall biology chapter tests](#)
-  [american government prentice hall guided reading chapter 11](#)
-  [prentice hall global history and geography chapter 6 pretest answers](#)
-  [test in the interlopers prentice hall](#)
-  [prentice hall life science test](#)
-  [prentice hall sociology test bank](#)
-  [prentice hall world geography test answers](#)
-  [10th grade prentice hall geometry answers](#)
-  [prentice hall literature answer keys](#)
-  [compound subject and verbs prentice hall answers](#)
-  [systems engineering and analysis 5th edition prentice hall international series in industrial am](#)
-  [find prentice hall literature gold level answers](#)
-  [principles of optics optoelectronics and photonics prentice hall international series](#)

# DOWNLOAD PDF DOCUMENT